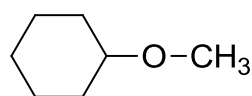
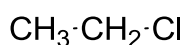
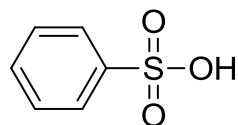
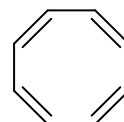
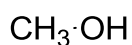
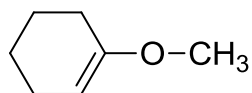
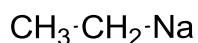
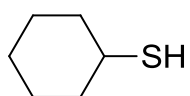
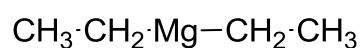
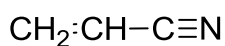
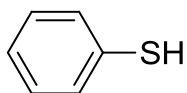
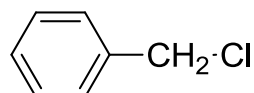
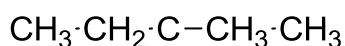
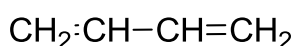
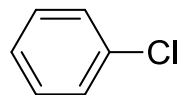
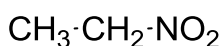
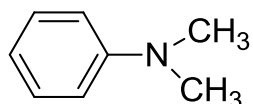
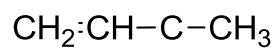
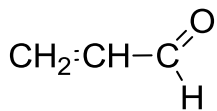
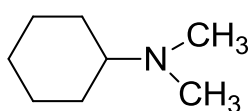


Домашнее задание:

Электронные эффекты и стабильность интермедиатов

Задание 1. В приведенных ниже молекулах покажите распределение электронной плотности и обозначьте электронные эффекты.



Задание 2. Расположите интермедиаты по увеличению стабильности. Приведите пояснения.

